

Mathea



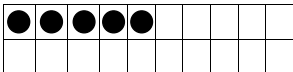
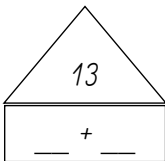

Lernfortschrittsdokumentation
Mathematik


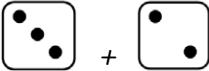
Klasse 1 / 36. Schulwoche

Name: _____

Klasse: _____

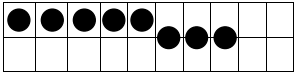
Datum: _____

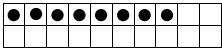
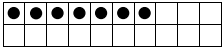
		
A 6	A 6 + 5	A 3
B 5	B 8 + 5	B 4
C 2	C 7 + 5	C 5

	$1 + 7$	
A 9	A 8	A 6
B 10	B 9	B 4
C 12	C 7	C 5

$8, 7, 6, \underline{\quad}$	$\triangle\triangle + \triangle\triangle\triangle$	$\square\bigcirc\bigcirc_ \bigcirc\bigcirc\square\bigcirc\bigcirc$
A 10	A 9	A \square
B 4	B 5	B \bigcirc
C 5	C 6	C \triangle

<div><div><div>13</div><div><div></div><div>+</div><div></div></div></div></div>	<div><div>☆☆☆☆☆</div><div>☆☆☆☆☆</div></div>	<div><div>18</div><div></div><div>20</div></div>
<div><div>A</div><div>6 + 7</div></div>	<div><div>A</div><div>11</div></div>	<div><div>A</div><div>21</div></div>
<div><div>B</div><div>5 + 7</div></div>	<div><div>B</div><div>10</div></div>	<div><div>B</div><div>19</div></div>
<div><div>C</div><div>4 + 7</div></div>	<div><div>C</div><div>8</div></div>	<div><div>C</div><div>17</div></div>

			$4 + 2$			$2 + 5$		
A	$8 - 4$		A	6		A	8	
B	$7 - 3$		B	7		B	7	
C	$8 - 3$		C	8		C	9	

<p>8</p>		
A		
B		
C	